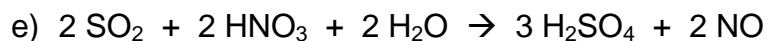
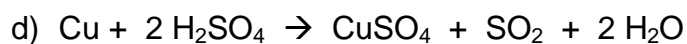
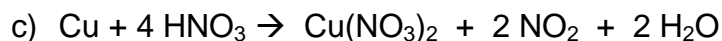
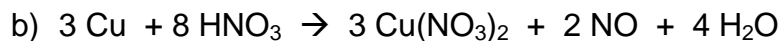
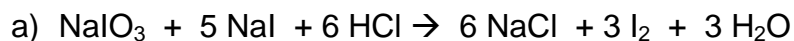


Redox Homework

Name: _____ Per: _____

Assign Oxidation Numbers and then Identify which substance is being reduced and which substance is being oxidized. Finally, label the Oxidizing Agent and the Reducing Agent in each reaction.



Redox Homework 11-29-05

Name: _____ Per: _____

Assign Oxidation Numbers and then Identify which substance is being reduced and which substance is being oxidized. Finally, label the Oxidizing Agent and the Reducing Agent in each reaction.

